

Identify various bills and coins used in currency. Arrange them in order of value.

CCSS.MATH.CONTENT.2.MD.C.8 | US_EN_01_MAT_C30_WS_m1.1

Jax and Jane decide to open a new toy store with their friends Pierre and Yvette. Help them with some of the tasks.

1 Help them match the price of the toys with their respective number names.



•

•

Thirty-two



•

•

Forty-three



•

•

Fifty-five



2 Jax and Jane are confused with the coins they have earned. Help them sort the coins by coloring the boxes in the given color codes.

Cent



Nickel



Dime



Quarter



Identify various bills and coins used in currency. Arrange them in order of value.
CCSS.MATH.CONTENT.2.MD.C.8 | US_EN_01_MAT_C30_WS_m1.1

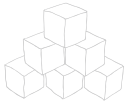
3

Jax has 1 dime and 4 nickels in his hand. Help Jane identify Jax's hand and check ☒ the correct box.



4

Help Jax and Jane to put the lowest to the highest value of coins in the smallest to the largest piggy banks. Match the coins with the piggy banks correctly.



3

A customer, comes to buy a toy rocket that costs 60¢. She gives a one dollar bill to the store. Help her get the appropriate change. Write the answer in the boxes given below.




60¢



| | |
|--|--|
| | |
|--|--|

¢

Change



Identify various bills and coins used in currency. Arrange them in order of value.
CCSS.MATH.CONTENT.2.MD.C.8 | US_EN_01_MAT_C30_WSA_m1.1

Jax and Jane decide to open a new toy store with their friends Pierre and Yvette. Help them with some of the tasks.

- 1 Help them match the price of the toys with their respective number names.

55¢

32¢

43¢

Thirty-two

Forty-three

Fifty-five

- 2 Jax and Jane are confused with the coins they have earned. Help them sort the coins by coloring the boxes in the given color codes.

Cent
Nickel
Dime
Quarter

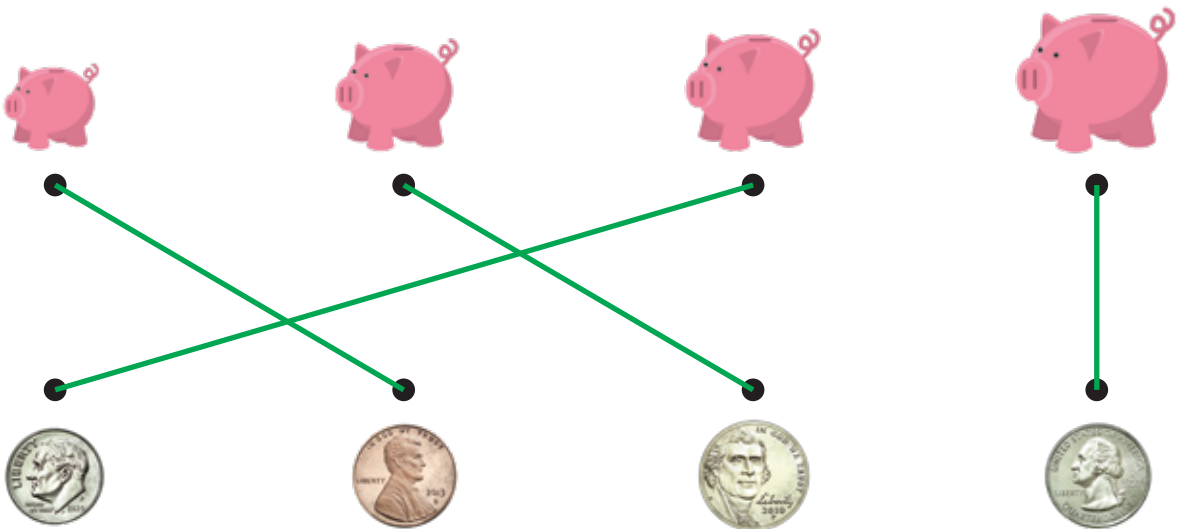
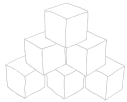


Identify various bills and coins used in currency. Arrange them in order of value.
CCSS.MATH.CONTENT.2.MD.C.8 | US_EN_01_MAT_C30_WSA_m1.1

- 3** Jax has 1 dime and 4 nickels in his hand. Help Jane identify Jax's hand and check ☒ the correct box.



- 4** Help Jax and Jane to put the lowest to the highest value of coins in the smallest to the largest piggy banks. Match the coins with the piggy banks correctly.



- 3** A customer, comes to buy a toy rocket that costs 60¢. She gives a one dollar bill to the store. Help her get the appropriate change. Write the answer in the boxes given below.



| | |
|---|---|
| 4 | 0 |
|---|---|

¢

Change

